

Name: _____

Date: _____



COMPARING Numbers

Directions: Compare each set of numbers. Color the greater number.

251	252	975	983
114	193	516	412
876	856	28	32
636	649	711	701
415	405	289	398
96	89	228	238

Name: _____








Date: _____



ORDERING NUMBERS



Directions: Order the numbers from greatest to least.


459, 237, 376, 572	
624, 141, 985, 736	
274, 842, 419, 615	
58, 69, 71, 52	
114, 116, 112, 119	
740, 150, 140, 750	
525, 815, 679, 292	

Name: _____


Date: _____

SUMMER SUBTRACTION

Directions: Find the missing numbers in the subtraction problems. The first one is done for you.




$$17 - 3 = 14$$



$$\underline{\quad} - \underline{\quad} = 9$$



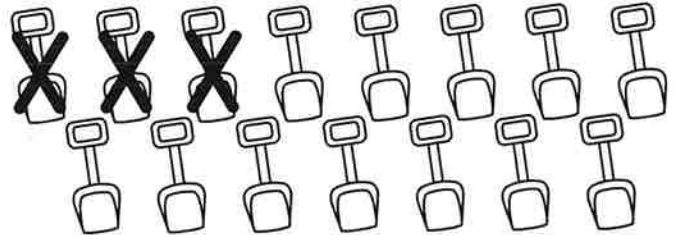
$$11 - \underline{\quad} = \underline{\quad}$$



$$\underline{\quad} - 6 = \underline{\quad}$$



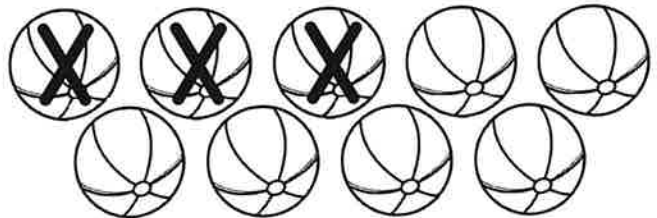
$$\underline{\quad} - 9 = \underline{\quad}$$



$$\underline{\quad} - \underline{\quad} = 12$$



$$\underline{\quad} - \underline{\quad} = 10$$




$$9 - \underline{\quad} = \underline{\quad}$$

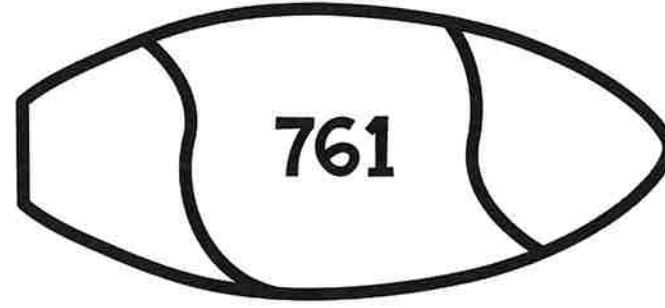

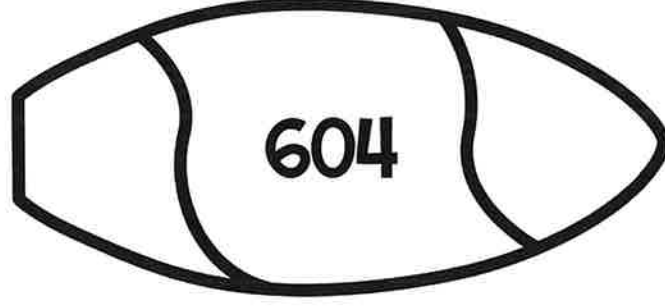

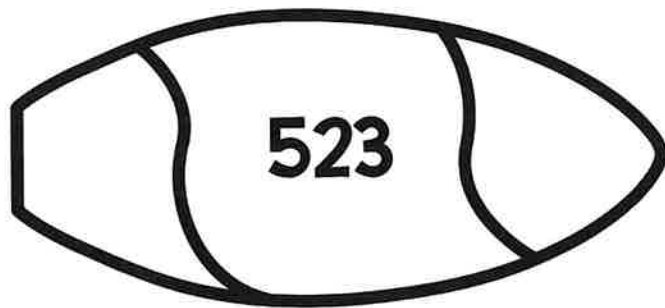


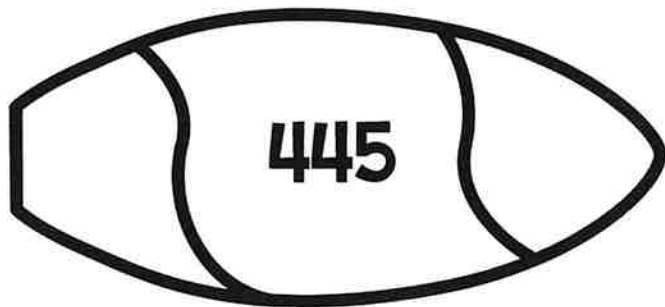
Name: _____

Date: _____

NUMBER SURFING




Directions: Write 100 less than the number shown on the left, and 100 more than the number shown on the right.



Name: _____

Date: _____



POPSICLE Addition

Directions: Add the numbers. Color the popsicle yellow if it is odd and blue if it is even.

$$\begin{array}{r} 19 \\ + 93 \\ \hline \end{array}$$

$$\begin{array}{r} 94 \\ + 13 \\ \hline \end{array}$$

$$\begin{array}{r} 18 \\ + 16 \\ \hline \end{array}$$

$$\begin{array}{r} 33 \\ + 47 \\ \hline \end{array}$$

$$\begin{array}{r} 56 \\ + 61 \\ \hline \end{array}$$

$$\begin{array}{r} 39 \\ + 25 \\ \hline \end{array}$$

$$\begin{array}{r} 71 \\ + 44 \\ \hline \end{array}$$

$$\begin{array}{r} 77 \\ + 37 \\ \hline \end{array}$$

$$\begin{array}{r} 48 \\ + 15 \\ \hline \end{array}$$

$$\begin{array}{r} 29 \\ + 27 \\ \hline \end{array}$$

$$\begin{array}{r} 53 \\ + 93 \\ \hline \end{array}$$

$$\begin{array}{r} 26 \\ + 57 \\ \hline \end{array}$$


$$\begin{array}{r} 73 \\ + 82 \\ \hline \end{array}$$

$$\begin{array}{r} 68 \\ + 25 \\ \hline \end{array}$$

$$\begin{array}{r} 88 \\ + 82 \\ \hline \end{array}$$

Name: _____

Date: _____



POPSICLE SUBTRACTION

Directions: Subtract the numbers. Color the popsicle pink if it is odd and green if it is even.

$$\begin{array}{r} 98 \\ - 34 \\ \hline \end{array}$$

$$\begin{array}{r} 75 \\ - 28 \\ \hline \end{array}$$

$$\begin{array}{r} 76 \\ - 47 \\ \hline \end{array}$$

$$\begin{array}{r} 92 \\ - 55 \\ \hline \end{array}$$

$$\begin{array}{r} 89 \\ - 66 \\ \hline \end{array}$$

$$\begin{array}{r} 80 \\ - 46 \\ \hline \end{array}$$

$$\begin{array}{r} 66 \\ - 18 \\ \hline \end{array}$$

$$\begin{array}{r} 97 \\ - 53 \\ \hline \end{array}$$

$$\begin{array}{r} 82 \\ - 23 \\ \hline \end{array}$$

$$\begin{array}{r} 44 \\ - 13 \\ \hline \end{array}$$

$$\begin{array}{r} 73 \\ - 65 \\ \hline \end{array}$$

$$\begin{array}{r} 85 \\ - 52 \\ \hline \end{array}$$

$$\begin{array}{r} 61 \\ - 15 \\ \hline \end{array}$$

$$\begin{array}{r} 68 \\ - 36 \\ \hline \end{array}$$

$$\begin{array}{r} 95 \\ - 23 \\ \hline \end{array}$$

Name: _____

Date: _____

Splash of NUMBERS!



Directions: Show how to represent each number in the different forms below.

25

91

78

40

62

37

84

TENS	ONES	EXPANDED FORM	BASE TEN BLOCKS

Name: _____

Date: _____

BEACH DAY SHOPPING



Directions: Look at how much each item costs. Color in that amount of coins.
